

Class-V

Chapter-5

Does it look same.



Answer : The shapes that are divided into two mirror halves are 1,2,4,5,6,7,8,10,15

Q.2 Find out the letter in English alphabet look the same after half a turn.

Ans. H,I,N,O,S,X,Z

Q.3 Which of the following words read same after half a turn.

Ans. MOW, SWIMS,SIS, NOON.

Q.4 Give half a turn to the numbers from 0 to9 find which of them still look same.

Ans. 0,1,8

Q.5 Think of two ,three ,four digit numbers which would look same on half a turn.

Ans. Two digit number – 11, 88

Three digit number – 101, 111,181, 808,888

Four digit number -1001,1111,1881,8008,8888













Q.6 which of the following pictures will look same on half a turn .

See the pictures in the book.

Ans. 1,3,6,8 look same on half turn.

Q.7 Draw the shape that would look same on half turn.

Ans.

	<i>Given shapes</i>	<i>On 1/4 turn</i>	<i>On 1/2 turn</i>
(a)			
(b)			
(c)			
(d)			

Q.8 Look at the following shapes. Draw how they will look on $\frac{1}{6}$ and $\frac{1}{3}$ turn.

Ans.

	$\frac{1}{3}$ turn	$\frac{1}{6}$ turn
