

# ST. MICHAEL'S SCHOOL

CLASS: - 3<sup>RD</sup>

SUB: - MATH

## FUN WITH GIVE AND TAKE

### CHAPTER: - 6

#### I. Do add and check your answer: -

<b>HTO</b>	<b>Check – HTO</b>
a) $\begin{array}{r} 345 \\ +243 \\ \hline 588 \end{array}$	$\begin{array}{r} 588 - \text{Answer} \\ -243 - 2^{\text{nd}} \text{ number} \\ \hline 345 - 1^{\text{st}} \text{ number} \end{array}$

<b>HTO</b>	<b>Check – HTO</b>
b) $\begin{array}{r} 624 \\ +233 \\ \hline 857 \end{array}$	$\begin{array}{r} 857 - \text{Answer} \\ -233 - 2^{\text{nd}} \text{ number} \\ \hline 624 - 1^{\text{st}} \text{ number} \end{array}$

<b>HTO</b>	<b>Check – HTO</b>
c) $\begin{array}{r} 325 \\ +333 \\ \hline 658 \end{array}$	$\begin{array}{r} 658 - \text{Answer} \\ -333 - 2^{\text{nd}} \text{ number} \\ \hline 325 - 1^{\text{st}} \text{ number} \end{array}$

<b>HTO</b>	<b>Check – HTO</b>
d) $\begin{array}{r} 641 \\ +350 \\ \hline 991 \end{array}$	$\begin{array}{r} 991 - \text{Answer} \\ -350 - 2^{\text{nd}} \text{ number} \\ \hline 641 - 1^{\text{st}} \text{ number} \end{array}$

#### II. Subtract and check your answer: -

<b>HTO</b>	<b>Check – HTO</b>
a) $\begin{array}{r} 375 \\ -146 \\ \hline 229 \end{array}$	$\begin{array}{r} 229 - \text{Answer} \\ +146 - 2^{\text{nd}} \text{ number} \\ \hline 375 - 1^{\text{st}} \text{ number} \end{array}$

<b>HTO</b>	<b>Check – HTO</b>
b) $\begin{array}{r} 254 \\ -234 \\ \hline 020 \end{array}$	$\begin{array}{r} 020 - \text{Answer} \\ +234 - 2^{\text{nd}} \text{ number} \\ \hline 254 - 1^{\text{st}} \text{ number} \end{array}$

<b>HTO</b>	<b>Check – HTO</b>
c) $\begin{array}{r} 613 \\ -407 \\ \hline 206 \end{array}$	$\begin{array}{r} 206 - \text{Answer} \\ +407 - 2^{\text{nd}} \text{ number} \\ \hline 613 - 1^{\text{st}} \text{ number} \end{array}$

<b>HTO</b>	<b>Check – HTO</b>
d) $\begin{array}{r} 638 \\ -254 \\ \hline 384 \end{array}$	$\begin{array}{r} 384 - \text{Answer} \\ +254 - 2^{\text{nd}} \text{ number} \\ \hline 638 - 1^{\text{st}} \text{ number} \end{array}$

#### III. Fill the missing numbers in boxes: -

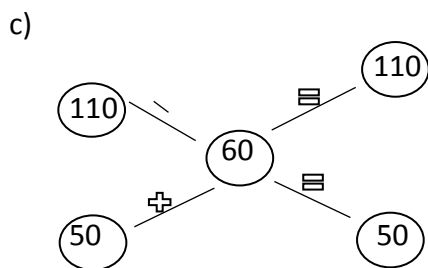
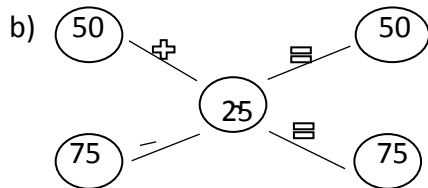
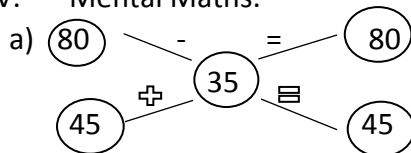
a) $\begin{array}{r} 54\boxed{7} \\ -334 \\ \hline 213 \end{array}$	(b) $\begin{array}{r} 998 \\ -4\boxed{5}3 \\ \hline 54\boxed{5} \end{array}$	(c) $\begin{array}{r} 456 \\ -3\boxed{3}4 \\ \hline 122 \end{array}$
---	--	--

$$\begin{array}{r} (d) \ 8 \ 7 \ 5 \\ - \ 5 \ 4 \ 3 \\ \hline 3 \ 3 \ 2 \end{array}$$

$$\begin{array}{r} (e) \ 9 \ 4 \ 5 \\ - \ 6 \ 3 \ 4 \\ \hline 3 \ 1 \ 1 \end{array}$$

$$\begin{array}{r} (f) \ 7 \ 5 \ 4 \\ - \ 5 \ 2 \ 3 \\ \hline 2 \ 3 \ 1 \end{array}$$

IV. Mental Maths.



V. Find the Missing numbers: -

- 100, 200, 300, 400, 500, 600, 700.
- 900, 800, 700, 600, 500, 400, 300.
- 50, 100, 150, 200, 250, 300, 350, 400.
- 300, 250, 200, 150, 100, 50.
- 15, 25, 35, 45, 55, 65.
- 280, 260, 240, 220, 200, 180, 160.
- 125, 150, 175, 200, 225, 250, 275, 300.

### Word Problems

Ques no.1 Baby tortoise is 33 years old. Mummy tortoise is 150 years old. How much younger is baby tortoise than Mummy tortoise?

Solve. Age of Mummy tortoise = 150 years

Age of Baby tortoise = -33 years

Baby tortoise = 117 years younger than Mummy tortoise.

Ques no. 2 Arvind has read 69 pages of a story book. Gauri has read 95 pages of that story book. Who has read more pages and how many more?

Solve. In a story book,

Gauri has read = 95 pages

Arvind has read = -69 pages

Gauri has read = 26 more pages.

Ques no. 3 Reena noted the electricity meter readings of her house. Last month's reading was 118 units. This month's reading is 193 units. How much electricity did she use in one month?

Solve. This month's reading = 193 units

Last month's reading = -118 units

= 075 units

She used 75 units of electricity.

Ques no. 4 Khushboo bought a shirt for Rs125 and trousers for Rs165. How much money did she spend altogether?

Solve. Bought a shirt for Rs = 125

Bought trousers for Rs = +165

She spent Rs = 290 altogether

Ques no. 5 Indus's pencil is 15 cm long. Jyoti's pencil is 8 cm long. Whose pencil is longer. How much longer?

Solve. Length of Indus's pencil = 15 cm

Length of Jyoti's pencil = -8 cm

Indus's pencil is 07 cm longer.

Ques no. 6 Ajay cooked chapatis in 25 minutes. Then he made dal in 15 minutes. How much time did he take to cook both things?

Solve. Time took for chapati = 25 minutes

Time took for dal = +15 minutes

He took = 40 minutes to cooked both things.

Ques no. 7 Chanchal sells school sweaters. In 2 days, she sold some red, blue and grey coloured sweaters.

	<b>Red</b>	<b>Blue</b>	<b>Grey</b>
--	------------	-------------	-------------

Solve. Sweaters sold on First day =	38	66	74
-------------------------------------	----	----	----

Sweaters sold on second day =	40	23	89
-------------------------------	----	----	----

(a) How many grey, red and blue sweaters did Chanchal sell in 2 days?

Solve. Total grey sweaters =  $74 + 89 = 163$

Total red sweater =  $38 + 40 = 78$

Total blue sweater =  $66 + 23 = 89$